

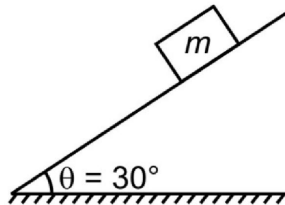
SAMPLE PAPER - 119


Time : 1 : 15 Hr.

Question : 60

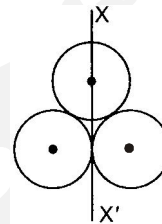
PHYSICS

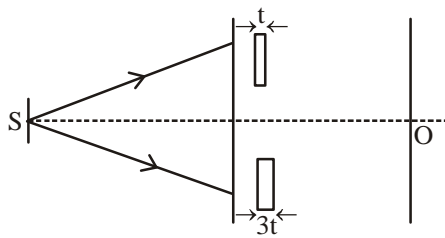
01. Plane having inclination 30° . The coefficient of friction between the block and the inclined plane is 0.75. The contact force on the block is-



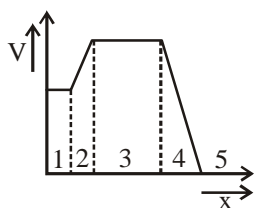
- (1) $\frac{3}{4}mg$ (2) $2mg$ (3) $\frac{5}{4}mg$ (4) mg
02. Find the time after which the particle's initial velocity will be perpendicular to instantaneous velocity when it is projected with 30 m/s from horizontal ground by making an angle 37° with vertical.
- (1) 6 second (2) 3.75 second
 (3) 3 second (4) None of these
03. Particles of masses $2M$, m and M are respectively at points A, B and C with $AB = \frac{1}{2}(BC)$. m is much-much smaller than M and at time $t = 0$, they are all at rest. At subsequent times before any collision takes place:
- 
- (1) m will remain at rest.
 (2) m will move towards M .
 (3) m will move towards $2M$.
 (4) m will have oscillatory motion.
04. At height $h = 3R$ from the earth surface value of acceleration due to gravity is g_1 and at depth 'd' acceleration due to gravity is g_2 . If $g_2 = 4g_1$. Find depth d (Given : radius of earth = 6400 km)
- (1) 3600 km (2) 4800 km
 (3) 1200 km (4) 3200 km
05. Three identical spherical shells, each of mass m and radius r are placed as shown in figure. Consider an axis XX' which is touching to two shells and passing through

diameter to third shell. Moment of inertia of the system consisting of these three spherical shells about XX axis is



- (1) $4mr^2$ (2) $\frac{11}{5}mr^2$ (3) $3mr^2$ (4) $\frac{16}{5}mr^2$
06. You measure two quantities as $A = (1.0 \pm 0.2) m$ and $B = (2.0 \pm 0.2) m$. You should report correct value for \sqrt{AB} as
- (1) $(1.4 \pm 0.4) m$ (2) $(1.41 \pm 0.15) m$
 (3) $(1.4 \pm 0.3) m$ (4) $(1.4 \pm 0.2) m$
07. In YDSE set-up, two thin transparent slabs of thickness t and $3t$ are introduced in front of slits (as shown in figure). As a result, the 1st order minimum is formed at central point O, then value of λ is
- 
- (1) $n t$ (2) $4(n-1) t$
 (3) $3(n-1) t$ (4) $4 n t$
08. The inward and outward electric flux for a closed surface in units of $N\cdot m^2/C$ are respectively 8×10^3 and 4×10^3 . Then the total charge inside the surface is [where $\epsilon_0 =$ permittivity constant]
- (1) $4 \times 10^3 C$ (2) $-4 \times 10^3 C$
 (3) $\frac{(-4 \times 10^3)}{\epsilon_0} C$ (4) $-4 \times 10^3 \epsilon_0 C$

09. The figure gives the electric potential V as a function of distance through five regions on x -axis. Which of the following is true for the electric field E in these regions?



- (1) $E_2 = E_4, E_5 = 0$
 (2) $E_1 = E_3 = E_5 = 0$
 (3) $E_2 = E_4 = E_5$
 (4) $E_1 < E_2 < E_3 < E_4 < E_5$
10. Electric charges of $+10\mu\text{C}$, $+5\mu\text{C}$, $-3\mu\text{C}$ and $+8\mu\text{C}$ are placed at the corners of a square of side $\sqrt{2}$ m. the potential at the centre of the square is
- (1) 1.8 V (2) 1.8×10^6 V
 (3) 1.8×10^5 V (4) 1.8×10^4 V

11. At time of t s, a particle of mass 3 kg has position vector $\vec{r} = (3t)\hat{i} - (4 \cos t)\hat{j}$. The impulse of the force during the time interval $0 \leq t \leq \frac{\pi}{2}$ is-

- (1) $12\hat{j}$ Ns (2) $9\hat{j}$ Ns
 (3) $4\hat{j}$ Ns (4) $14\hat{j}$ Ns

12. A uniform cable of mass 'M' and length 'L' is placed on a horizontal surface such that its $\left(\frac{1}{n}\right)^{\text{th}}$ part is hanging below the edge of the surface. To lift the hanging part of the cable upto the surface, the work done should be:

- (1) $\frac{MgL}{n^2}$ (2) $\frac{MgL}{2n^2}$
 (3) $\frac{2MgL}{n^2}$ (4) $nMgL$

13. A particle of mass 'm' is projected with a velocity $v = kV_e$ ($k < 1$) from the surface of the earth. ($V_e =$ escape velocity)
 The maximum height above the surface reached by the particle is

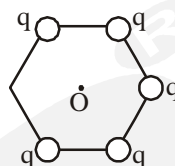
- (1) $\frac{Rk^2}{1-k^2}$ (2) $R\left(\frac{k}{1-k}\right)^2$
 (3) $R\left(\frac{k}{1+k}\right)^2$ (4) $\frac{R^2k}{1+k}$

14. Two coherent sources of intensity ratio x^2 interfere. Then, in interference pattern,

$$(1) \frac{I_{\max} - I_{\min}}{I_{\max} + I_{\min}} = \frac{1 + x^2}{2\sqrt{x}} \quad (2) \frac{I_{\max} + I_{\min}}{I_{\max} - I_{\min}} = \frac{1 + x}{2\sqrt{x}}$$

$$(3) \frac{I_{\max} - I_{\min}}{I_{\max} + I_{\min}} = \frac{2x}{1 + x^2} \quad (4) \frac{I_{\max} + I_{\min}}{I_{\max} - I_{\min}} = \frac{2x}{1 + x^2}$$

15. Five point charge each having magnitude 'q' are placed at the corner of hexagon as shown in fig. Net electric field at the centre 'O' is \vec{E} . To get net electric field at 'O' be $6\vec{E}$, charge placed on the remaining sixth corner should be



- (1) 6 q (2) -6 q (3) 5 q (4) -5 q

CHEMISTRY

16. When 1.04 g of BaCl_2 is present in 10^5 g of solution the concentration of solution is
- (1) 0.104 ppm (2) 10.4 ppm
 (3) 0.0104 ppm (4) 104 ppm
17. Solubility of a substance is its maximum amount that can be dissolved in a specified amount of solvent. It depends upon
- (i) nature of solute (ii) nature of solvent
 (iii) temperature (iv) pressure
- (1) Only (i), (ii) and (iii)
 (2) Only (i), (iii) and (iv)
 (3) Only (i) and (iv)
 (4) (i), (ii), (iii) and (iv)
18. The system that forms maximum boiling azeotrope is
- (1) acetone - chloroform
 (2) ethanol - acetone
 (3) *n*-hexane - *n*-heptane
 (4) carbon disulphide - acetone
19. If 1 g of solute (molar mass = 50 g mol^{-1}) is dissolved in 50 g of solvent and the elevation in boiling point is 1 K. The molar boiling constant of the solvent is
- (1) 2 (2) 3
 (3) 2.5 (4) 5
20. Which of the following will have the highest freezing point at one atmosphere?
- (1) 0.1 M NaCl solution (2) 0.1 M sugar solution
 (3) 0.1 M BaCl_2 solution (4) 0.1 M FeCl_3 solution

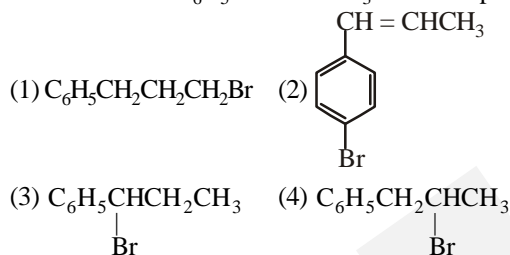
21. Which of the following reaction will tend to proceed to more extent towards completion?
- (1) $\text{H}_2(\text{g}) + \text{Br}_2(\text{g}) \rightleftharpoons 2\text{HBr}(\text{g}); K_C = 1.4 \times 10^{-21}$
 (2) $2\text{NO}(\text{g}) \rightleftharpoons \text{N}_2(\text{g}) + \text{O}_2(\text{g}); K_C = 2.1 \times 10^{30}$
 (3) $2\text{BrCl}(\text{g}) \rightleftharpoons \text{Br}_2(\text{g}) + \text{Cl}_2(\text{g})$ (in CCl_4 solution); $K_C = 0.145$
 (4) Both (1) and (3)

22. Which of the following is the least reactive towards nucleophile?
- (1) $\text{CH}_3\text{CH}_2\text{Cl}$ (2) CH_3Cl
 (3) $\text{H}_2\text{C}=\text{CH}-\text{CH}_2\text{Cl}$ (4) $\text{C}_6\text{H}_5\text{Cl}$

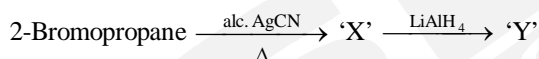
23. Methyl bromide reacts with AgF to give methyl fluoride and AgBr. This reaction is called:
- (1) Finkelstein reaction (2) Fittig reaction
 (3) Swarts reaction (4) Wurtz reaction

24. Which of the following compounds will give a yellow precipitate with iodine and alkali?
- (1) Acetophenone (2) Methyl acetate
 (3) Acetamide (4) 2-Hydroxy propane

25. The reaction of $\text{C}_6\text{H}_5\text{CH}=\text{CHCH}_3$ with HBr produces:



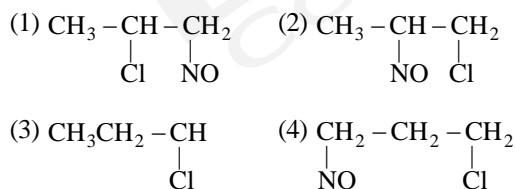
26. In the given set of reactions:



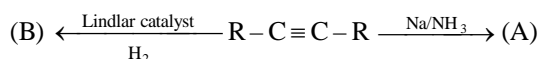
The IUPAC name of the product 'Y' is:

- (1) N-isopropyl methanamine
 (2) N-methylpropan-2-amine
 (3) N-methylpropan-1-amine
 (4) butan-2-amine

27. $\text{CH}_3\text{CH}=\text{CH}_2 + \text{NOCl} \longrightarrow \text{P}$
 Identify the adduct:



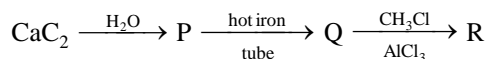
28. In the reactions



(A) and (B) are geometrical isomers. Then:

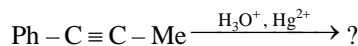
- (1) A is cis and B is trans
 (2) A is trans and B is cis
 (3) A and B are cis
 (4) A and B are trans

29. In the following reaction, the product 'R' is:



- (1) benzene
 (2) ethylbenzene
 (3) toluene
 (4) n-propyl benzene

30. Identify the product in the reaction



- (1) $\text{PhCH}_2\text{CH}_2\text{CHO}$
 (2) $\text{PhCOCH}_2\text{CH}_3$
 (3) $\text{PhCH}_2\text{COCH}_3$
 (4) PhCOCOMe

BOTANY

31. Select the incorrect statement regarding reproduction in Rhodophyceae.

- (1) Asexual reproduction occurs by non-motile spores.
 (2) Sexual reproduction occurs by motile gametes.
 (3) Sexual reproduction is oogamous.
 (4) Complex post-fertilisation developmental events occur.

32. In pteridophytes, main plant body is a (i), which is (ii) into true roots, stem and leaves.

Fill the blanks in above statement and select the correct option.

- (1) (i)–sporophyte; (ii)–differentiated
 (2) (i)–sporophyte; (ii)–not differentiated
 (3) (i)–gametophyte; (ii)–differentiated
 (4) (i)–gametophyte; (ii)–not differentiated

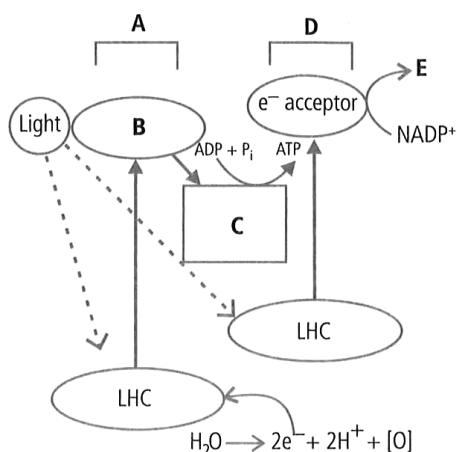
33. Heterospory is found in some members of ____ and all members of ____.

- (1) Bryophyta, Pteridophyta
 (2) Pteridophyta, Bryophyta
 (3) Bryophyta, Gymnospermae
 (4) Pteridophyta, Spermatophyta

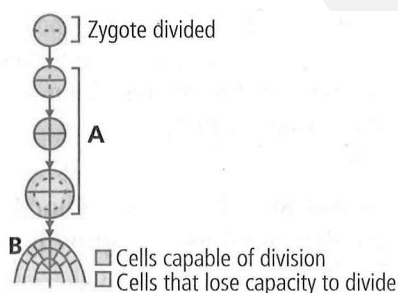
34. Select the incorrect statement regarding the anatomy of a typical monocotyledonous stem.

- (1) Phloem parenchyma is absent.
 (2) Vascular bundles are scattered, conjoint, collateral and closed.
 (3) Each vascular bundle is surrounded by a bundle sheath.
 (4) Ground tissue is differentiated into cortex, endodermis, pericycle and pith.

35. Identify A, B, C, D and E in the given flow chart showing Z-scheme of light reaction.



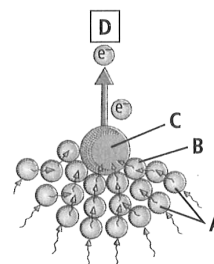
- (1) A-P₇₀₀; B-H⁺acceptor; C-e⁻acceptor; D-P₆₈₀; E-NADPH
 (2) A-Photo-system I; B-e⁻acceptor; C-e⁻transport system; D-Photo-system II; E-NADPH
 (3) A-Photo-system II; B-H⁺acceptor; C-e⁻acceptor; D-P₇₀₀; E-NADPH
 (4) A-Photo-system II; B-e⁻acceptor; C-e⁻transport system; D-Photo-system I; E-NADPH
36. The given figure shows development of an embryo that undergoes two phases A and B. Select the correct option regarding it.



- (1) A-Geometric phase; B-Arithmetic phase
 (2) A-Arithmetic phase; B-Geometric phase
 (3) A-Arithmetic phase; B-Exponential phase
 (4) A-Exponential phase; B-Stationary phase
37. Which of the following is an example of differentiation?
 (1) Lignocellulosic wall thickenings of tracheids
 (2) Loss of nucleus, vacuolisation and end wall perforations in sieve tube elements
 (3) Elongation, thickening and emptying of sclerenchyma fibres
 (4) All of these
38. Select the incorrect statement out of the following.
 (1) All animals belonging to various phyla are assigned to the Kingdom Animalia.

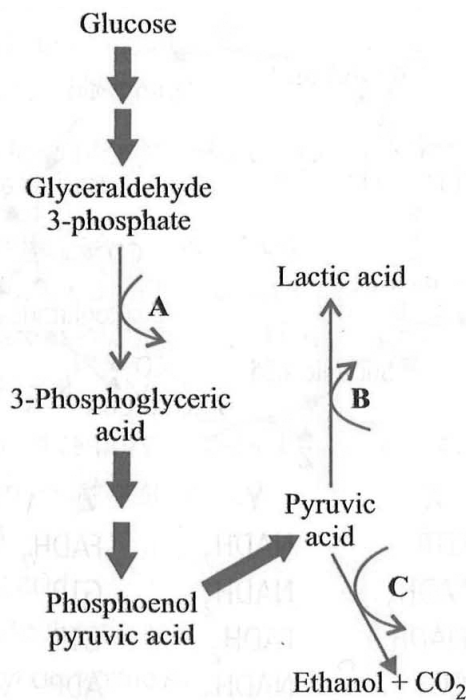
- (2) As we go higher from species to kingdom, number of common characteristics goes on increasing.
 (3) Different classes comprising fish, amphibians, reptiles, birds and mammals together constitute the Phylum Chordata.
 (4) Plant order Polymoniales includes the families like Solanaceae and Convolvulaceae based on the vegetative and floral characters.

39. On the basis of inputs given, one can put the given organism, in which of the following kingdom? (as per understandings of Linnaeus)
 (A) Cell type-Eukaryotic
 (B) Cell wall-Present (without cellulose)
 (C) Nuclear membrane-Present
 (D) Body organisation-Multicellular/loose tissue
 (E) Mode of nutrition-Heterotrophic (Saprophytic/Parasitic)
 (1) Plantae (2) Fungi
 (3) Animalia (4) Protista
40. ATP assimilation takes place in
 (1) Mitochondrial & chloroplast processes
 (2) Mitochondrial processes only
 (3) All cellular processes
 (4) None of the above
41. In a bisexual flower undergoing self fertilization, all the meiotic divisions result in formation of all functional gametes. The number meiotic divisions to produce 28 seeds is
 (1) 28 (2) 35 (3) 14 (4) 7
42. Given figure depicts the light harvesting complex (LHC) of photosystem I (PS I).



- Select the correct identification for A, B, C and D.
 (1) A-Core molecules; B-Antenna molecule; C-P₆₈₀; D-Primary e⁻ acceptor
 (2) A-Antenna molecules; B-Core molecule; C-P₇₀₀; D-Primary e⁻ acceptor
 (3) A-Antenna molecules; B-Core molecule; C-P₇₀₀; D-Plastocyanin
 (4) A-Core molecules; B-Reaction centre; C-P₆₈₀; D-Plastocyanin

43. What does A, B and C depict in the given pathways of anaerobic respiration?



- (1) A-NADH + H⁺ → NAD⁺; B-NAD⁺ → NADH + H⁺; C-NAD⁺ → NADH + H⁺
 (2) A-NADH + H⁺ → NAD⁺; B-NADH + H⁺ → NAD⁺; C-NAD⁺ → NADH + H⁺
 (3) A-NAD⁺ → NADH + H⁺; B-NADH + H⁺ → NAD⁺; C-NADH + H⁺ → NAD⁺
 (4) A-NAD⁺ → NADH + H⁺; B-NADH + H⁺ → NAD⁺; C-NAD⁺ → NADH + H⁺

44. Which of the following combinations of characters is true for slime moulds?
 (1) Parasitic, plasmodium without walls, spores dispersed by air currents
 (2) Saprophytic, plasmodium with walls, spores dispersed by water
 (3) Parasitic, plasmodium without walls, spores dispersed by water
 (4) Saprophytic, plasmodium without walls, spores dispersed by air currents
45. What is the number of bivalents in beginning of meiosis I, if the gamete of same organism has 32 chromosomes
 (1) 16 (2) 32
 (3) 64 (4) 16 pairs

ZOOLOGY

46. Match the columns :

Column-I	Column-III
A. Neophron	(i) Vulture
B. Struthio	(ii) Penguin
C. Pavo	(iii) Peacock
D. Aptenodytes	(iv) Ostrich

(1) A= (ii), B= (i), C = (iv), D = (iii)
 (2) A= (i), B= (iv), C = (ii), D = (iii)
 (3) A= (i), B= (iii), C = (i), D = (iv)
 (4) A= (i), B= (iv), C = (iii), D = (ii)

47. Adipose tissue :

- (1) Stores fat and mainly present beneath the skin
 (2) Is a type of loose connective tissue
 (3) Possess abundant mast cells
 (4) More than one option is correct

48. Match the columns :

	Column-I		Column-II
A.	Hyaline cartilage	(i)	Intervertebral disc and pubic symphysis
B.	White fibrous cartilage	(ii)	Tip of nose
C.	Elastic cartilage	(iii)	Ribs & Sternum
D.	Calcified cartilage	(iv)	Head of Humans

- (1) A = (iii), B = (i), C = (iv), D = (ii)
 (2) A = (ii), B = (iii), C = (i), D = (iv)
 (3) A = (iii), B = (i), C = (ii), D = (iv)
 (4) A = (iv), B = (ii), C = (i), D = (iii)

49. The first heart sound LUB is associated with thex..... whereas, the second heart sound DUB is associated with they.....

- (1) X = Closure of tricuspid and bicuspid valves; Y = Opening of semilunar valves
 (2) X = Opening of tricuspid and bicuspid valves; Y = Closure of semilunar valves
 (3) X = Closure of tricuspid and bicuspid valves; Y = Closure of semilunar valves
 (4) X = Opening of tricuspid and bicuspid valves; Y = Opening of semilunar valves

50. Assertion : Bats and whales are classified as mammals.

Reason : Bats and whales have four chambered heart.

- (1) Both the assertion and reason are true and reason explains the assertion.
 (2) Both the assertion and reason are true but reason does not explain the assertion.
 (3) Assertion is true but reason is false
 (4) Assertion is false but reason is true

51. A. Acetic acid can form cholesterol
 B. Anabolic pathway is endergonic while catabolic pathway is exergonic
 C. All biomolecules have a turn over, i.e., they are constantly being changed into some other biomolecules and also made from other biomolecules.
 D. Flow of metabolites through metabolic pathway has a definite rate and direction. It is called dynamic state of body constituents.
 (1) A and B are correct (2) Only D is correct
 (3) C and D are correct (4) All are correct
52. Which of the following is a correct sequence of step involved in respiration?
 A–Utilization of O₂ by body cells.
 B–Transport of gases by blood upto tissues.
 C–Pulmonary ventilation.
 D–Diffusion of gases at alveolar surface.
 E–Exchange of gases between blood and tissues.
 (1) D – B – E – A – C
 (2) C – D – B – E – A
 (3) D – E – B – C – A
 (4) C – E – B – D – A
53. Statement A : Human skull is monocondylic.
 Statement B : Ribs in human are bicephalic.
 (1) Only statement A is correct
 (2) Only statement B is correct
 (3) Both statement A and B are correct
 (4) Both statement A and B are incorrect
54. Reproductive health in society can be improved by
 (a) introduction of sex education in schools
 (b) increased medical assistance
 (c) awareness about contraception and STDs
 (d) equal opportunities to male and female child
 (e) ban on amniocentesis
 (f) encouraging myths and misconceptions
 (1) All of these
 (2) (a), (b), (c) and (d)
 (3) (a), (b), (c), (d) and (e)
 (4) (b) and (e)
55. What should be the features for an ideal contraceptive ?
 (a) It should be user-friendly
 (b) It should be easily available
 (c) It should be ineffective and reversible with least side effects
 (d) It should be effective and reversible with least side effect
 (e) It should be interfere with the sexual act of the user
 (1) (a), (b) and (e)
 (2) (a), (b) and (c)
 (3) (a), (b) and (d)
 (4) (a), (b), (d) and (e)
56. The region of pituitary, commonly called anterior pituitary produces GH, PRL, TSH, ACTH, LH and FSH.
 (1) Pars distalis (2) Pars intermedia
 (3) Pars tuberalis (4) Neurohypophysis
57. A correct systemic circulation pathway is:
 (1) Right auricle → Left ventricle → Aorta → Tissues → Veins
 (2) Right ventricle → Pulmonary aorta → Tissues → Pulmonary vein → Left auricle
 (3) Left auricle → Left ventricle → Aorta → Arteries Tissues → Veins → Right atrium
 (4) Left auricle → Left ventricle → Pulmonary aorta → Tissues → Right auricle
58. Which of the following pairs of hormones are not antagonistic (having opposite effects) to each other ?
 (1) Parathormone - Calcitonin
 (2) Insulin - glucagon
 (3) Aldosterone - Atrial Natriuretic Factor
 (4) Relaxin - Inhibin
59. A woman presents to her physician complaining that her menstrual cycles are irregular. She reports that she menstruates each month, but she cannot predict when. After reporting the dates of her last 5 periods, her physician concluded that her cycle is normal, but that it is a 35 days cycle. She reports that she wants to get pregnant, but cannot predict when ovulation will occur. Her physician will tell her that she should expect to ovulate on day
 (1) 10 (2) 17 (3) 15 (4) 21
60. Mark the incorrect statement
 (1) Polyspermy prevented by depolarisation of the membrane is called fast block
 (2) Entry of sperm into ovum restarts the cell cycle
 (3) If implantation occurs anywhere else other than uterus, it is called tubal pregnancy
 (4) Ability to reproduce is lost in female primate after menopause